
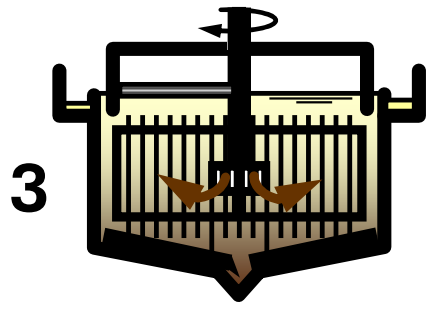


2




1

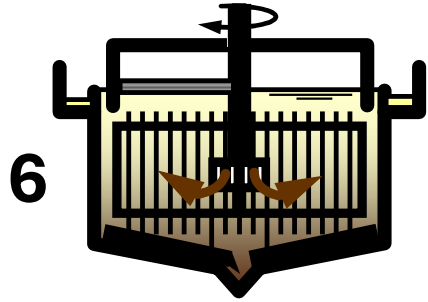



3

4



5



6



7

- 1 = _____
- 2 = _____
- 3 = _____
- 4 = _____
- 5 = _____
- 6 = _____
- 7 = _____

Aufgabe 8.8.1_Fließbild Schlamm KA Musterhausen